


Name 1.NBT.C  
1.NBT.B.3 [M] 1.NBT.C.5

1. Nick's locker number is 62. Mai's locker number is less than Nick's locker number.

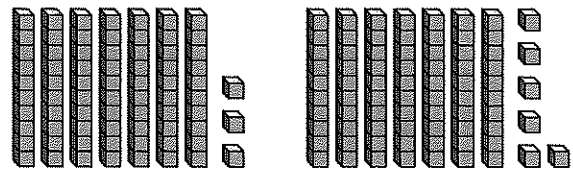
Which is Mai's locker number?



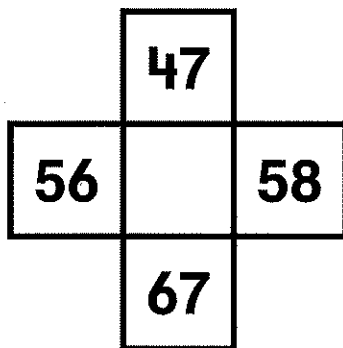
- (A) 61      (B) 62      (C) 63      (D) 64

2. Which equation correctly compares the place-value blocks? Choose all that apply.

- ☐  $76 > 73$   
☐  $73 < 76$   
☐  $73 > 76$   
☐  $73 = 76$



3. Write the number to complete the part of the hundred chart.



4. Tim has 82 stickers. His sister gives him 10 more. How many stickers does Tim have now?

- (A) 28  
 (B) 72  
 (C) 83  
 (D) 92