

Name _____

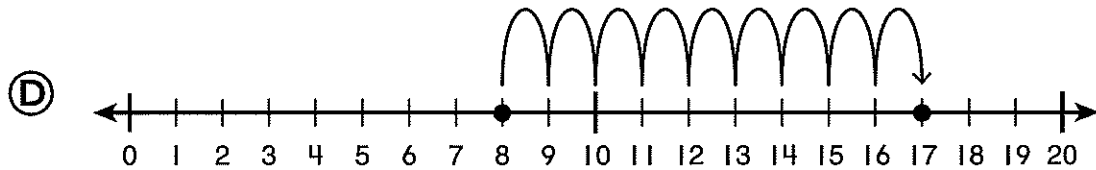
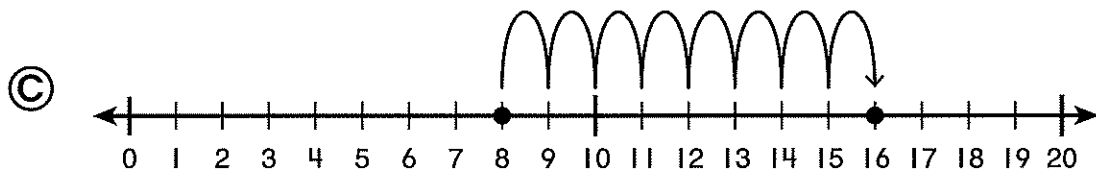
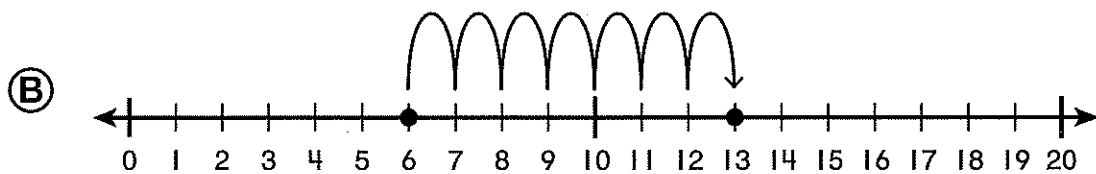
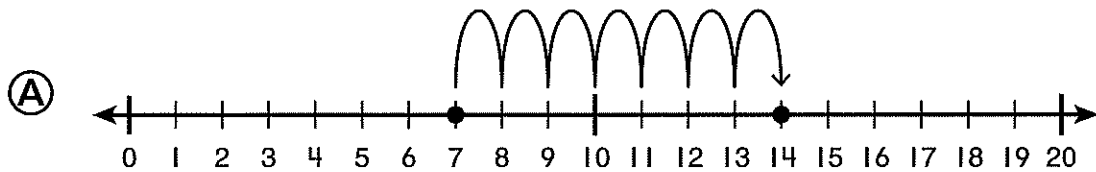
1. Nicole plants 8 flowers.
Her brother plants 9 flowers.
How many flowers do they plant in all?
- Ⓐ 19
- Ⓑ 18
- Ⓒ 17
- Ⓓ 16
2. Phil has 6 silver coins. He has 7 gold coins.
How many coins does Phil have in all?
- Ⓐ 13
- Ⓑ 14
- Ⓒ 15
- Ⓓ 16
3. Use the open number line. Show how to count on to find the sum.

$$8 + 6 = \underline{\hspace{2cm}}$$



7. Dan walks 8 blocks on Monday. He walks 9 blocks on Tuesday. How many blocks does Dan walk in all?

Which number line shows the problem?



8. Tara paints 5 beads. Then she paints 7 more beads. How many beads does Tara paint in all?

Solve the problem. Explain the strategy you used.