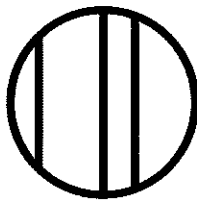



Name I.G.A
I.G.A.3

MP4


1. Which shape shows 4 equal shares?




(A)



(B)

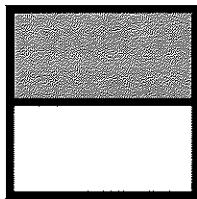


(C)

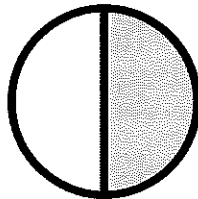


(D)

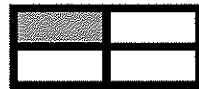
2. Which shape does **NOT** show one half colored gray?




(A)



(B)



(C)



(D)

3. Divide the circle into fourths. Then color one fourth of the circle. Explain how you know that you colored the right amount.

