









Name I.G.A.1[M] I.G.A.1[M]  
I.G.A.2[M]

MP4

1. Which shape is a triangle?

- (A) 
- (B) 
- (C) 
- (D) 

2. Which shape has 4 sides?

- (A) 
- (B) 
- (C) 
- (D) 


3. How many flat surfaces and edges does a cylinder have?

\_\_\_\_\_ flat surface(s)

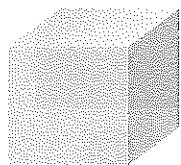
\_\_\_\_\_ edges

4. Keisha makes 2 triangles and a square. Then she puts them together to make a new shape.


Draw a shape Keisha can make.




8. Which 3-D shape has 2 flat surfaces and 0 vertices?



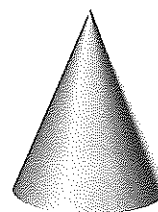
Ⓐ



Ⓑ



Ⓒ



Ⓓ

---

9. Which 3-D shapes can be used to make this object?  
Circle all that apply.

