






Name 1. MD.B 3 [M]

M/24

1. Luis eats lunch after 10 o'clock and before 2 o'clock every day. Which clocks show the time Luis might eat lunch?
Choose all that apply.

☐☐☐☐

2. Which clock shows the same time as the clock face?



(A)



(B)



(C)



(D)



3. Write the time that is shown on the clock face.

