

Name: _____

Science Grade 2 Unit 3 Benchmark

1.



Circle the landforms. Underline the bodies of water.


ocean island peninsula valley

river canyon stream glacier bay


mountain lake cave volcano cliff

2.

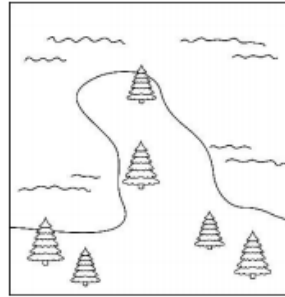
Circle the name of each landform.




- a. mountain
- b. peninsula
- c. bay



- a. hill
- b. canyon
- c. ocean



- a. island
- b. peninsula
- c. lake




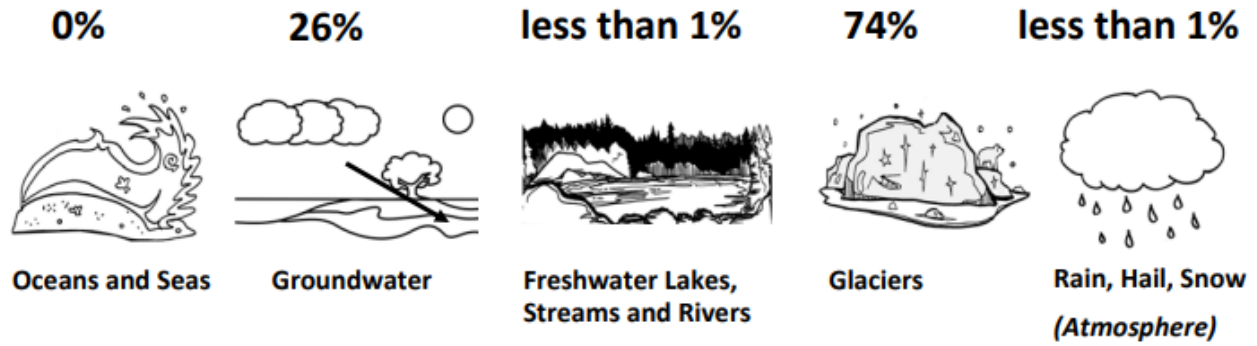
- a. plateau
- b. mountain
- c. valley

3. Complete the chart below.

Type of Landscape	Kinds of Land Found Here	Bodies of Water Found Here
Desert		
Mountain		
Coast		
Valley		

4. Label each picture with the correct state of water on Earth.





This image shows where water can be found on Earth.

5. Where is all of the saltwater located?
 - A. Glaciers
 - B. Groundwater
 - C. Oceans and Seas
 - D. Freshwater lakes, streams, and rivers

6. Where is most of the freshwater found?
 - A. Glaciers
 - B. Groundwater
 - C. Oceans and Seas
 - D. Freshwater lakes, streams, and rivers

7. Where is the smallest amount of freshwater found?
 - A. Glaciers
 - B. Groundwater
 - C. Oceans and Seas
 - D. Freshwater lakes, streams, and rivers