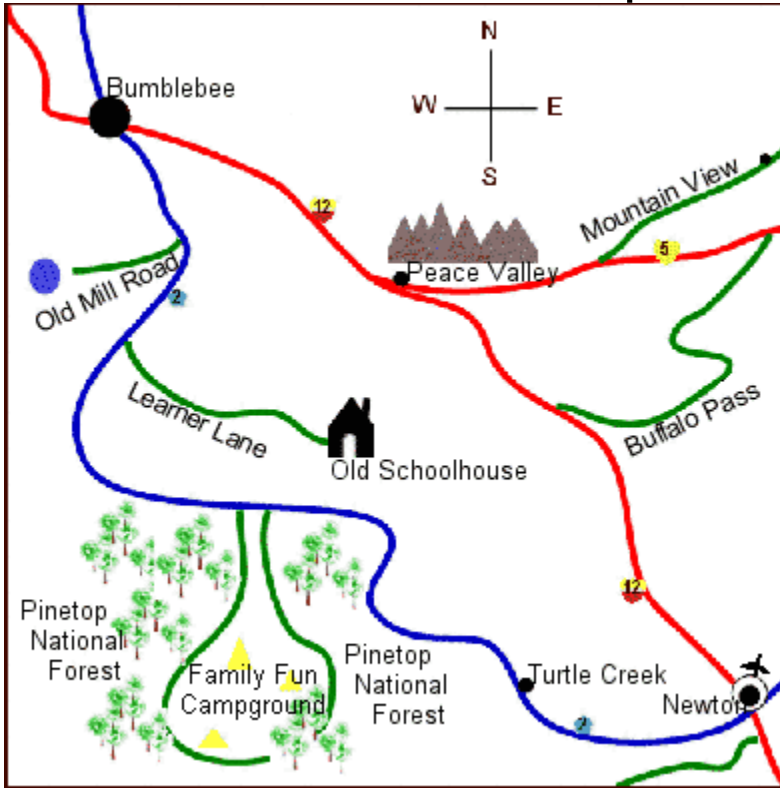


Map Skills



Legend

- Interstate Highway
- State Highway
- Local Road
- Pop. 10,000 - 25,000
- Pop. 50,000 - 75,000
- Pop. under 5,000
- Airport

Use the map and legend on this page to answer the following questions.

1. Do you take the Interstate or the State Highway to travel from Bumblebee to Peace Valley?

2. What is the name of the road that runs from Interstate Highway 12 to Interstate Highway 5?

3. Is Turtle Creek north or south of Peace Valley?

4. What is the name of the Interstate Highway that connects Bumblebee and Newton?

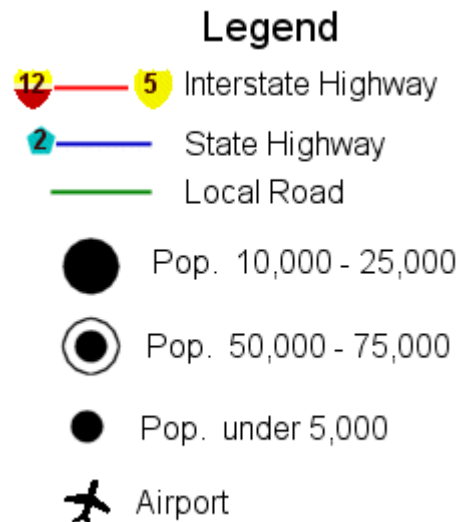
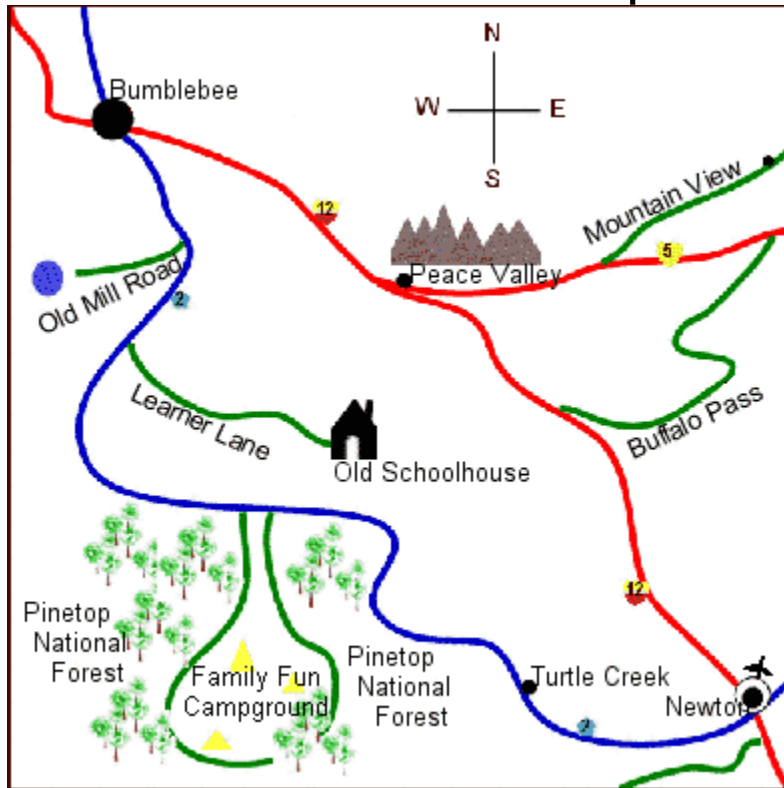
5. What is the population of Newton? _____
6. In which direction would you travel to get to the old schoolhouse from Newton? From Bumblebee?

7. Give directions for the quickest route from Bumblebee to the Pinetop National Forest.

8. From what local road do you have access to Interstate Highway 12 and Interstate Highway 5?

9. Is Family Fun Campground in the forest or in the mountains? Where would you rather camp?

Map Skills



Use the map and legend on this page to answer the following questions.

1. Do you take the Interstate or the State Highway to travel from Bumblebee to Peace Valley?

Interstate

2. What is the name of the road that runs from Interstate Highway 12 to Interstate Highway 5?

Buffalo Pass

3. Is Turtle Creek north or south of Peace Valley? South

4. What is the name of the Interstate Highway that connects Bumblebee and Newton?

Interstate 12

5. What is the population of Newton? 50,000 to 75,000

6. In which direction would you travel to get to the old schoolhouse from Newton? From Bumblebee?

Northwest from Newton Southeast from Bumblebee

7. Give directions for the quickest route from Bumblebee to the Pinetop National Forest.

Go South on State Highway 2

8. From what local road do you have access to Interstate Highway 12 and Interstate Highway 5?

Buffalo Pass

9. Is Family Fun Campground in the forest or in the mountains? Where would you rather camp?

Campground is in the forest